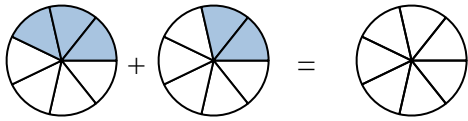




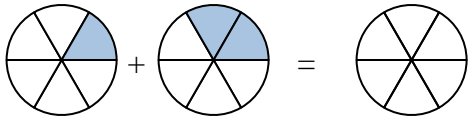
Shade in the fraction to solve the problem.

Ex)



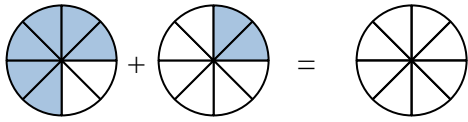
Ex. $\frac{3}{7}$ $\frac{2}{7}$ $\frac{5}{7}$

1)



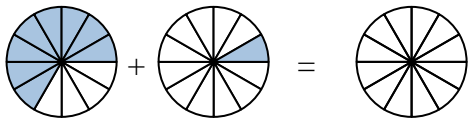
1. _____

2)



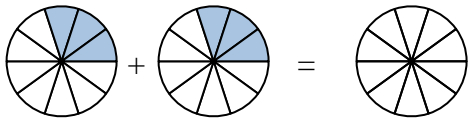
2. _____

3)



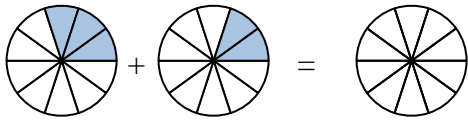
3. _____

4)



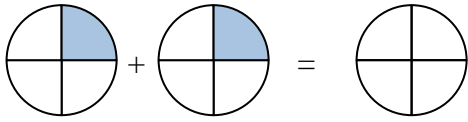
4. _____

5)



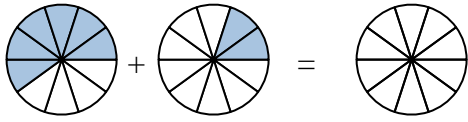
5. _____

6)



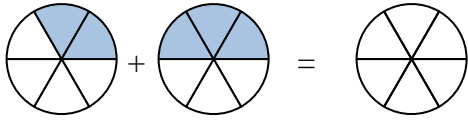
6. _____

7)



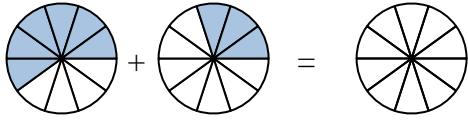
7. _____

8)



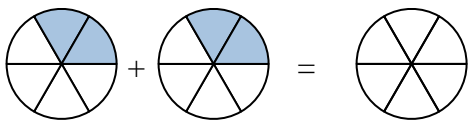
8. _____

9)



9. _____

10)

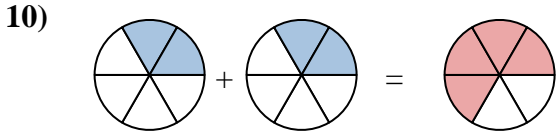
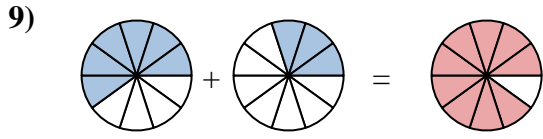
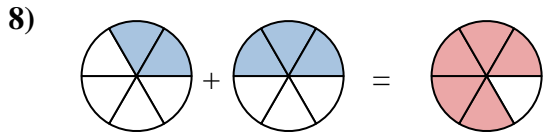
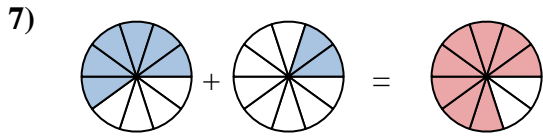
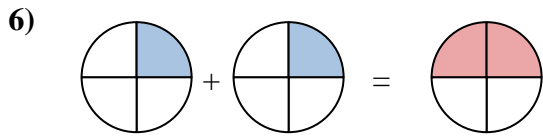
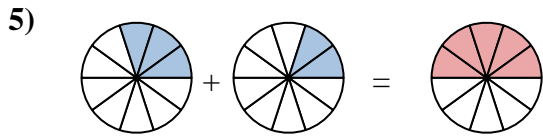
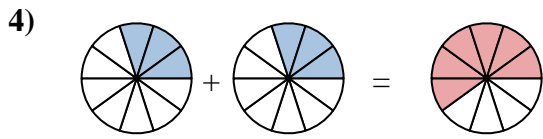
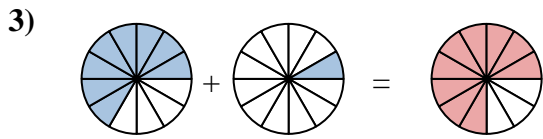
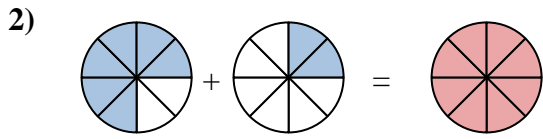
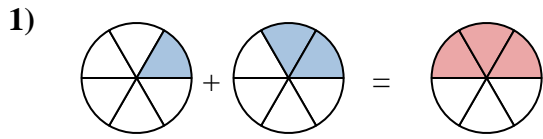
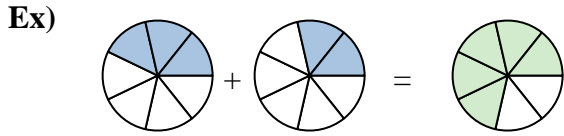


10. _____

Answers



Shade in the fraction to solve the problem.



Answers

Ex.	$\frac{3}{7}$	$\frac{2}{7}$	$\frac{5}{7}$
1.	$\frac{1}{6}$	$\frac{2}{6}$	$\frac{3}{6}$
2.	$\frac{6}{8}$	$\frac{2}{8}$	$\frac{8}{8}$
3.	$\frac{8}{12}$	$\frac{1}{12}$	$\frac{9}{12}$
4.	$\frac{3}{10}$	$\frac{3}{10}$	$\frac{6}{10}$
5.	$\frac{3}{10}$	$\frac{2}{10}$	$\frac{5}{10}$
6.	$\frac{1}{4}$	$\frac{1}{4}$	$\frac{2}{4}$
7.	$\frac{6}{10}$	$\frac{2}{10}$	$\frac{8}{10}$
8.	$\frac{2}{6}$	$\frac{3}{6}$	$\frac{5}{6}$
9.	$\frac{6}{10}$	$\frac{3}{10}$	$\frac{9}{10}$
10.	$\frac{2}{6}$	$\frac{2}{6}$	$\frac{4}{6}$